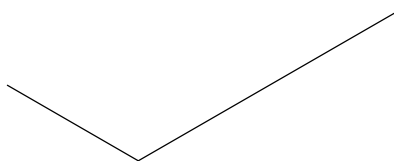
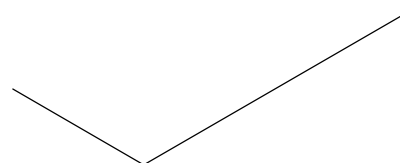
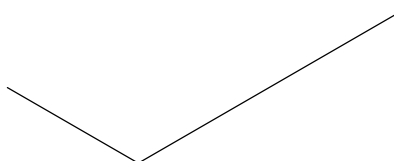
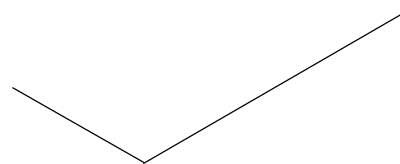
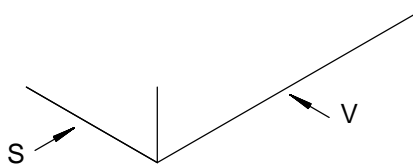
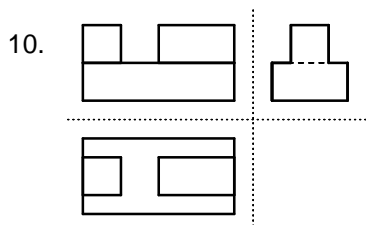
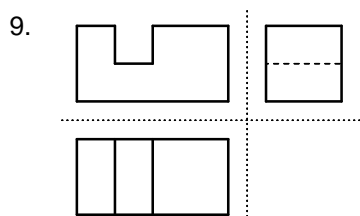
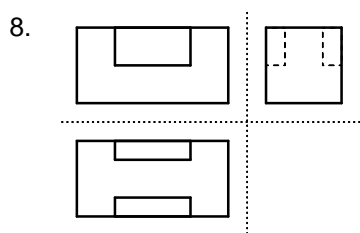
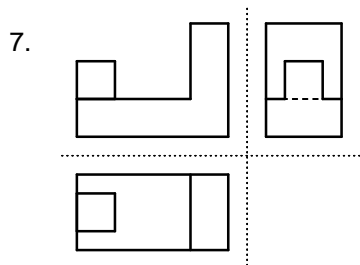
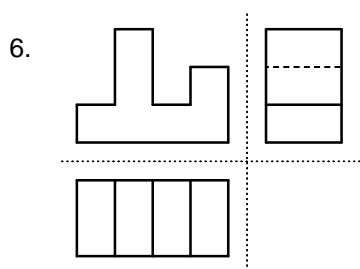


Aufgabe: Zeichne die Körper in der Isometrischen Projektion
im Maßstab 2 : 1!



© TS

Benennung:

ISOMETRISCHE PROJEKTIONEN 6 - 10 ZUM QUIZ 3

Blatt-Nr:

Maßstab:

Geprüft:

Datum:

Name:

Klasse:

TS 2004